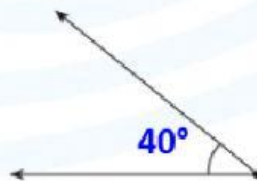
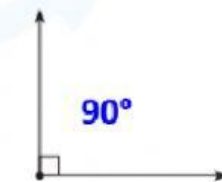


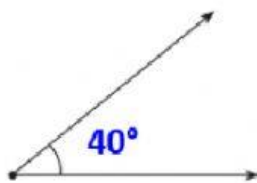
## REFUERZA EN CASA

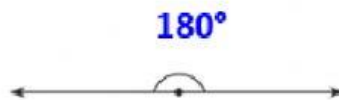
1. Escribe el nombre de los siguientes ángulos: (agudo, recto, obtuso, llano)

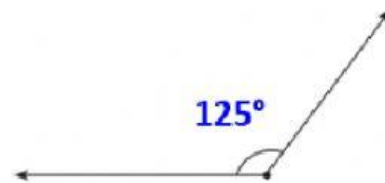













2. Calcula.

a.  $CS_{148^\circ} =$  \_\_\_\_\_

b.  $SSSSS_{115^\circ} =$  \_\_\_\_\_

c.  $CCCCC_{78^\circ} =$  \_\_\_\_\_

d.  $SCC_{72^\circ} =$  \_\_\_\_\_

e.  $CSS_{45^\circ} =$  \_\_\_\_\_