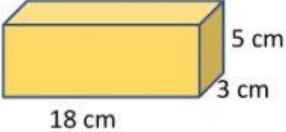
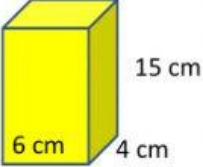
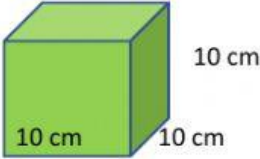
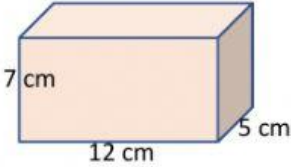
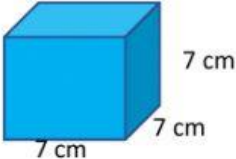


## Volumen de los cuerpos geométricos

Nombre del alumno (a): \_\_\_\_\_

Calcula el volumen de los siguientes prismas.

PRISMAS	PROCEDIMIENTO	RESULTADO
 18 cm 3 cm 5 cm	V= ____ X ____ X ____	V= _____
 6 cm 4 cm 15 cm	V= ____ X ____ X ____	V= _____
 10 cm 10 cm 10 cm	V= ____ X ____ X ____	V= _____
 7 cm 12 cm 5 cm	V= ____ X ____ X ____	V= _____
 7 cm 7 cm 7 cm	V= ____ X ____ X ____	V= _____