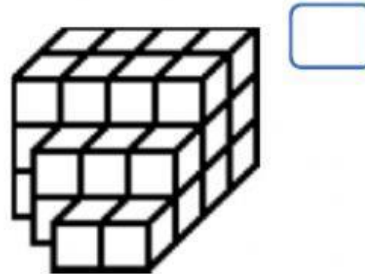
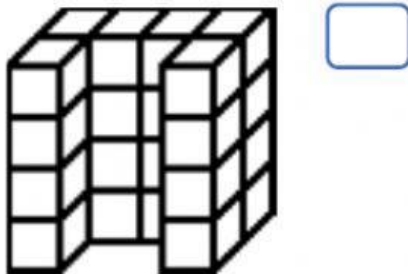

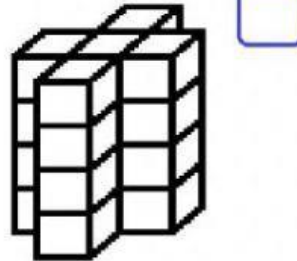
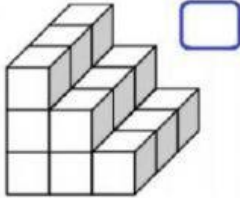


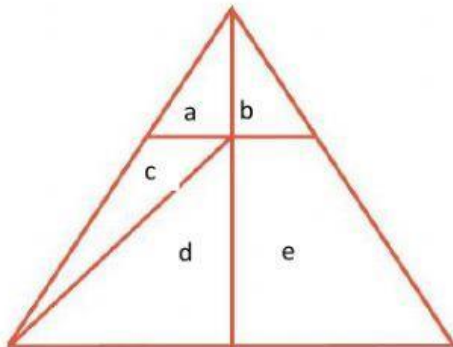
## CONTEO DE FIGURAS

NOMBRE: \_\_\_\_\_

Coloca el total de cubos:

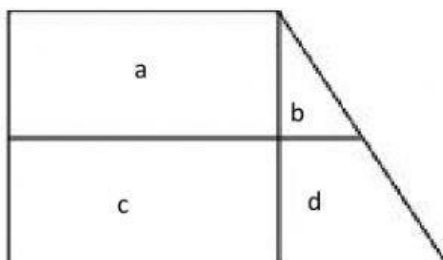


Halla la cantidad de triángulos que hay en la figura:



|          |  |  |
|----------|--|--|
| 1 letra  |  |  |
| 2 letras |  |  |
| 3 letras |  |  |
| 5 letras |  |  |

Halla la cantidad de cuadriláteros que hay en la figura:



|          |  |  |
|----------|--|--|
| 1 letra  |  |  |
| 2 letras |  |  |
| 4 letras |  |  |