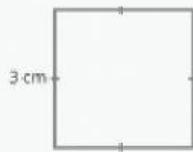


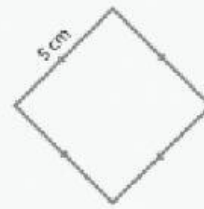
Find the area of the following squares and rectangles.



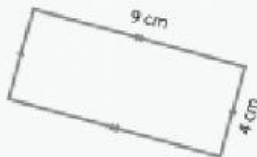
area: _____



area: _____



area: _____



area: _____



area: _____



area: _____