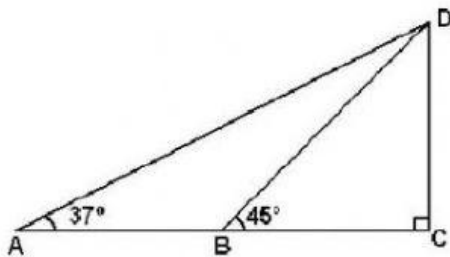
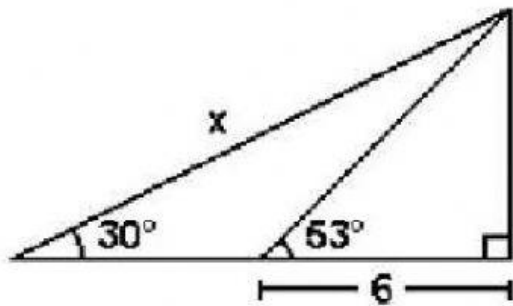


1. Calcula AB, Si $CD = 3$



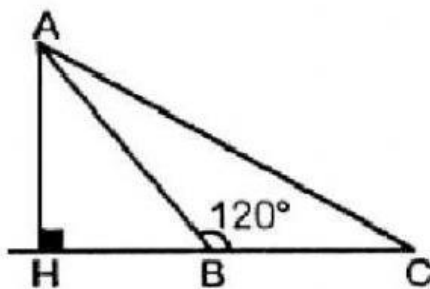
- a) 5
- b) 4
- c) 3
- d) 2
- e) 1

2. Halla "x"



- a) 12
- b) 10
- c) 16
- d) 14
- e) N.A.

3. Calcula AH, Si $HB = 10$



- a) 5
- b) 4
- c) $4\sqrt{2}$
- d) $5\sqrt{3}$
- e) 6

Miss Betty

