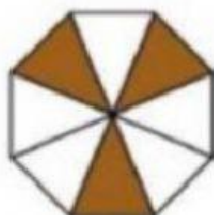
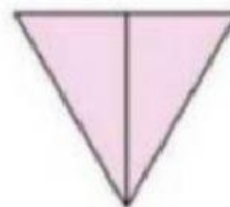


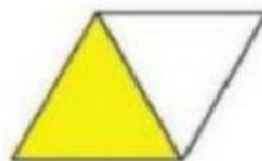
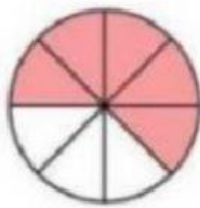


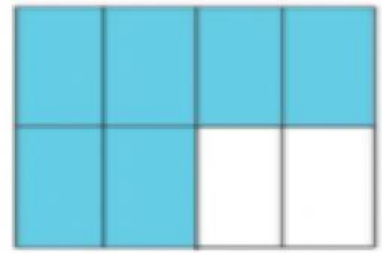
Nome: _____ Turma: _____

1 Escreva a fração correspondente a parte pintada.



2 Ligue corretamente

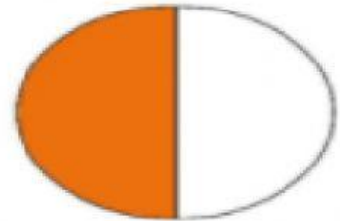
$$\frac{1}{2}$$



$$\frac{1}{3}$$



$$\frac{6}{8}$$



$$\frac{5}{8}$$



Quem estuda tem em suas mãos o poder de transformar não só a própria vida, como também das pessoas que o cercam.