






Name: \_\_\_\_\_ Date: \_\_\_\_\_

## GLAT (application)

Use your math book to  
show your working.

Use the diagram to answer the following questions.

| GAME POINTS |  |       |
|-------------|--|-------|
| Basketball  |  | _____ |
| Volleyball  |   | _____ |
| Football    |  | _____ |
| Soccer      |   | _____ |
| Tennis      |   | _____ |

Key: Each ball = 3 points

1. (a) Fill in the missing numbers on the graph above.

(b) What kind of graph is shown above?

☐ Bar Graph

☐ Tally Graph

☐ Pictograph

(c) Which sport scored the least number of points?

Answer: \_\_\_\_\_

(d) Which sport scored the greatest number of points?

Answer: \_\_\_\_\_

(e) Which sport scored exactly 15 points?

Answer: \_\_\_\_\_

(f) Click on the **TWO** sports that scored the same number of points.

☐ basketball

☐ volleyball

☐ football

☐ soccer

☐ tennis

(g) What was the total amount of points scored in basketball, football and soccer?

Answer: \_\_\_\_\_

(h) How many more points did football score than tennis?

Answer: \_\_\_\_\_