
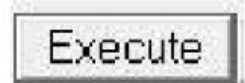
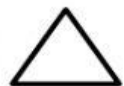


I. Match the following.

| | | |
|----|---|---|
| 1) |  | a) Clears the screen and brings the turtle back to the starting position. |
| 2) |  | b) Used to draw in Logo |
| 3) |  | c) Helps to find mistakes |
| 4) | CLEARSCREEN(CS) | d) Makes Logo carry out the commands. |

| | | | |
|----|----|----|----|
| 1) | 2) | 3) | 4) |
| | | | |

II. Fill in the blanks.

Command input box Title bar Logo Main screen LT Home

- 5) _____ is a simple computer language.
- 6) _____ shows the name of the program.
- 7) The blank space in the middle of the window is the _____.
- 8) You can enter Logo commands in _____.
- 9) _____ command turns the head of the turtle towards left.
- 10) _____ command brings the turtle back to its starting position.

III. State whether the following statements are true or false.

11) Control buttons are the buttons on the right side of the recall list box.

12) SETH command rotates the turtle.

13) BYE command is used to exit from Logo.

14) Primitives are the Logo commands.

IV. Name the Logo commands to perform the following tasks.

15) Move the turtle 40 steps forward.

16) Move the turtle 20 steps backward.

17) Turn the turtle 50 steps right.

18) Turn the turtle 30 steps left.

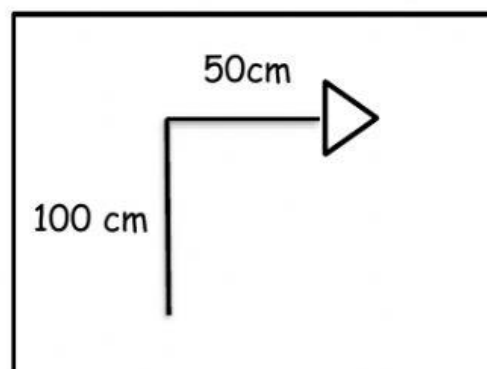
19) Hide the turtle.

20) Shows the turtle.

V. Circle the correct answer.

21) Aman wants to draw a picture as shown in the picture.

Which command will he choose to draw the picture?

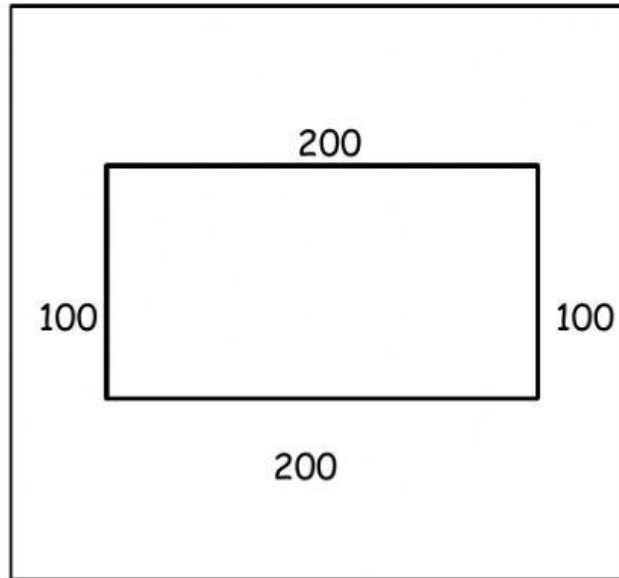


a) fd 100 rt 90 fd 50

b) fd 100 lt 90 fd 20

22) Rahul wants to draw the shape of a rectangle as shown in the picture.

Can you help him to write the commands to draw the shape?



VI. Label the components of MSW Logo Screen.

Menu bar

Title bar

Main screen

Turtle

Scroll bar

23)

27)

24)

25)

26)

