


Name: _____

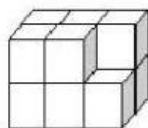
Mrs J's Resource Creations©

VOLUME OF IRREGULAR FIGURES - CLUE 5

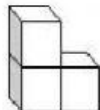
Reveal a clue by calculating the volume of the irregular figures below in cubic units (cu). Write the letter that equals your answer into the matching box under the figure (there may be more than one figure with the same volume, in this case use the same letter.) *The first one has been done for you.*

[Click here to return to the Possible Locations Page](#)

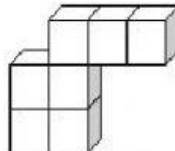
 = 1 cubic unit



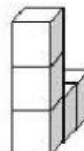
H
11 cu



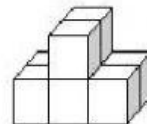
?



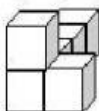
?



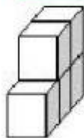
?



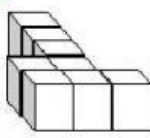
?



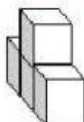
?



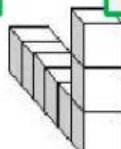
?



?



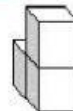
?



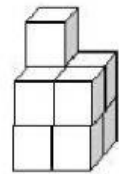
?



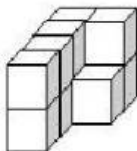
?



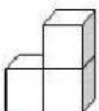
?



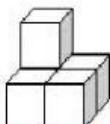
?



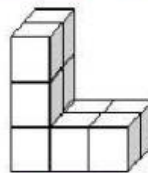
H
11 cu



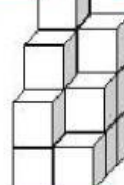
?



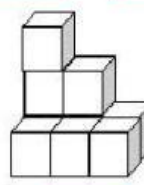
?



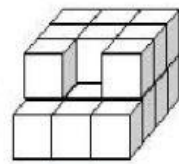
?



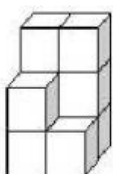
?



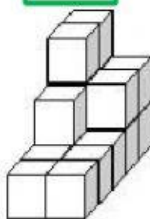
?



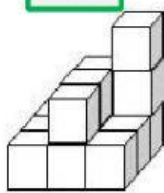
?



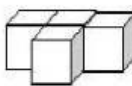
?



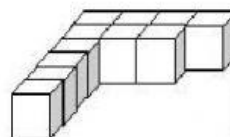
?



?



?



H
11 cu



11 cu = H

10 cu = D

17 cu = O

5 cu = A

15 cu = I

3 cu = E

6 cu = L

7 cu = W

20 cu = G

9 cu = N

8 cu = S

14 cu = R

4 cu = T