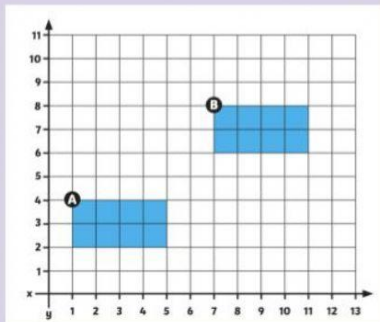


# Translation of Shapes

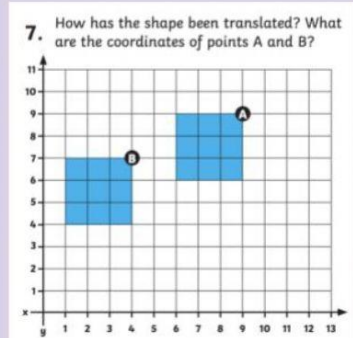


Describe the translation from point A to B:

What are the four new coordinates for rectangle B?

**Write them in clockwise starting at the B.**

( , )( , )( , )( , )

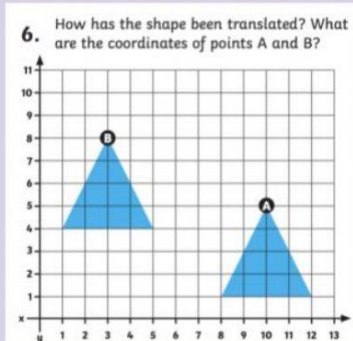


Describe the translation from point A to B:

What are the four new coordinates for rectangle B?

**Write them in clockwise starting at the B.**

( , )( , )( , )( , )

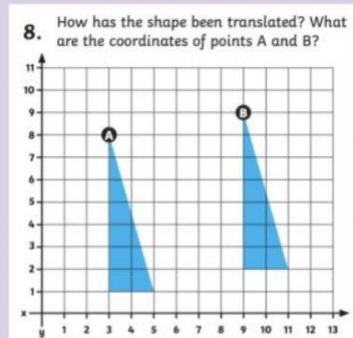


Describe the translation from point A to B:

What are the three new coordinates for triangle B?

**Write them in clockwise starting at the B.**

( , )( , )( , )

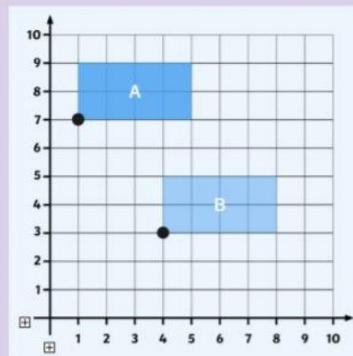


Describe the translation from point A to B:

What are the four new coordinates for triangle B?

**Write them in clockwise starting at the B.**

( , )( , )( , )



Describe the translation from point A to B:

What are the four new coordinates for trapezoid B?

**Write them in clockwise starting at the B.**

( , )( , )( , )( , )