

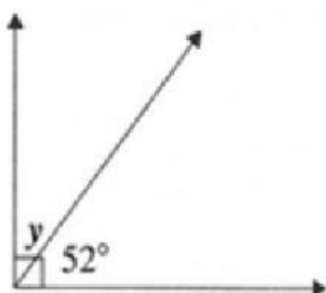
Name: \_\_\_\_\_ Date: \_\_\_\_\_

Mathematics

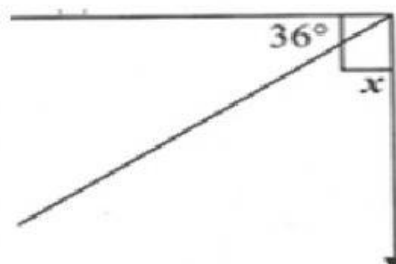
Geometry – Past BJC Questions

Instruction : Find the size of the angle marked with a letter

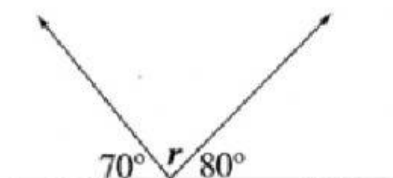
(1)



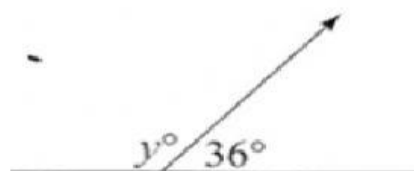
(2)



(3)



(4)



(5)

