

## 26b: Reflection

Name \_\_\_\_\_

1. Write the numbers so that the answer is correct.  
Use all three numbers in every expression.

a. 5 3 7

\_\_\_\_ · \_\_\_\_ + \_\_\_\_ = 22

\_\_\_\_ · \_\_\_\_ + \_\_\_\_ = 38

\_\_\_\_ · \_\_\_\_ - \_\_\_\_ = 8

\_\_\_\_ · \_\_\_\_ - \_\_\_\_ = 32

c. 4 7 5

\_\_\_\_ · \_\_\_\_ + \_\_\_\_ = 27

\_\_\_\_ · \_\_\_\_ + \_\_\_\_ = 39

\_\_\_\_ · \_\_\_\_ - \_\_\_\_ = 13

\_\_\_\_ · \_\_\_\_ - \_\_\_\_ = 31

b. 2 10 9

\_\_\_\_ · \_\_\_\_ + \_\_\_\_ = 29

\_\_\_\_ · \_\_\_\_ + \_\_\_\_ = 92

\_\_\_\_ · \_\_\_\_ - \_\_\_\_ = 11

\_\_\_\_ · \_\_\_\_ - \_\_\_\_ = 88

d. 8 10 4


\_\_\_\_ · \_\_\_\_ + \_\_\_\_ = 48

\_\_\_\_ · \_\_\_\_ + \_\_\_\_ = 84


\_\_\_\_ · \_\_\_\_ - \_\_\_\_ = 32

\_\_\_\_ · \_\_\_\_ - \_\_\_\_ = 76

2. Work out the prices of the objects.



total 24 euros



total 34 euros




\_\_\_\_ €



\_\_\_\_ €



total 12 euros




total 39 euros




\_\_\_\_ €



\_\_\_\_ €



total 36 euros



total 70 euros



\_\_\_\_ €



\_\_\_\_ €