

Name:

Date: Thursday, May 27, 2021

Subject: Mathematics Homework

1. Choose the name of the note.



One-hundred dollar note

Fifty-dollar note

Five-dollar coin

2. Choose the name of the coin.



five-dollar coin

ten-dollar coin

twenty-dollar coin

3. Count the amounts of money.



\$20

\$30

\$40

4. Count the amounts of money.



\$50

\$100

\$20






























5. A twenty-dollar coin can be exchanged for _____.

4 five-dollar coins

2 fifty-dollar notes

2 ten-dollar coins

Use the pictograph to answer the following questions.

Mango trees	     
Banana trees	    
Rose trees	   
Coconut trees	     
Grapes trees	       

6. There are _____ mango trees.
7. There are _____ grape trees.
8. There are _____ more grape trees than coconut trees.
9. There are _____ fewer rose trees than mango trees.
10. There are _____ more grape trees than banana trees.