

Name: _____ Date: _____

GLAT (application)

Use your math book to
show your working.




1. (a) Write the name of the child who is in the 6th position.

Answer: _____

- (b) Which position is Max in?

Answer: _____



2. Sally has 4,000 circles, 800 stars, 20 triangles and 5 hearts in a box of shapes.

- (a) Write the numbers shown in expanded form.

Answer: _____

- (b) Write the numbers shown in standard form

Answer: _____



3. Jill read 45 pages on Monday and 36 pages on Wednesday. How many pages did she read in total?

Answer: _____



4. Mrs. Bailey sold 3,748 cupcakes in March, 2035 cupcakes in April and 564 cupcakes in June. How many cupcakes did she sell altogether?

Answer: _____




5. Alex has 85 blocks. He used 28 blocks to build a tower. How many blocks does he have left?

Answer: _____



6. 540 persons were in the stadium at the start of the baseball game. 265 persons left the stadium before the game was over. How many persons watched the game until it ended?

Answer: _____



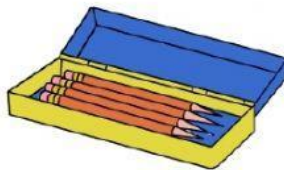
7. Logan filled 12 bags with apples. If he placed 5 apples in each bag, how many apples did he use altogether?

Answer: _____



8. The pet store has 26 dogs. Each dog has 2 spots on its back. How many spots are there in all?

Answer: _____



9. Gianna purchased 3 packs of pencils at a cost of \$2.50 each. What was the total amount that Gianna paid for 3 packs of pencils?

Answer: _____