



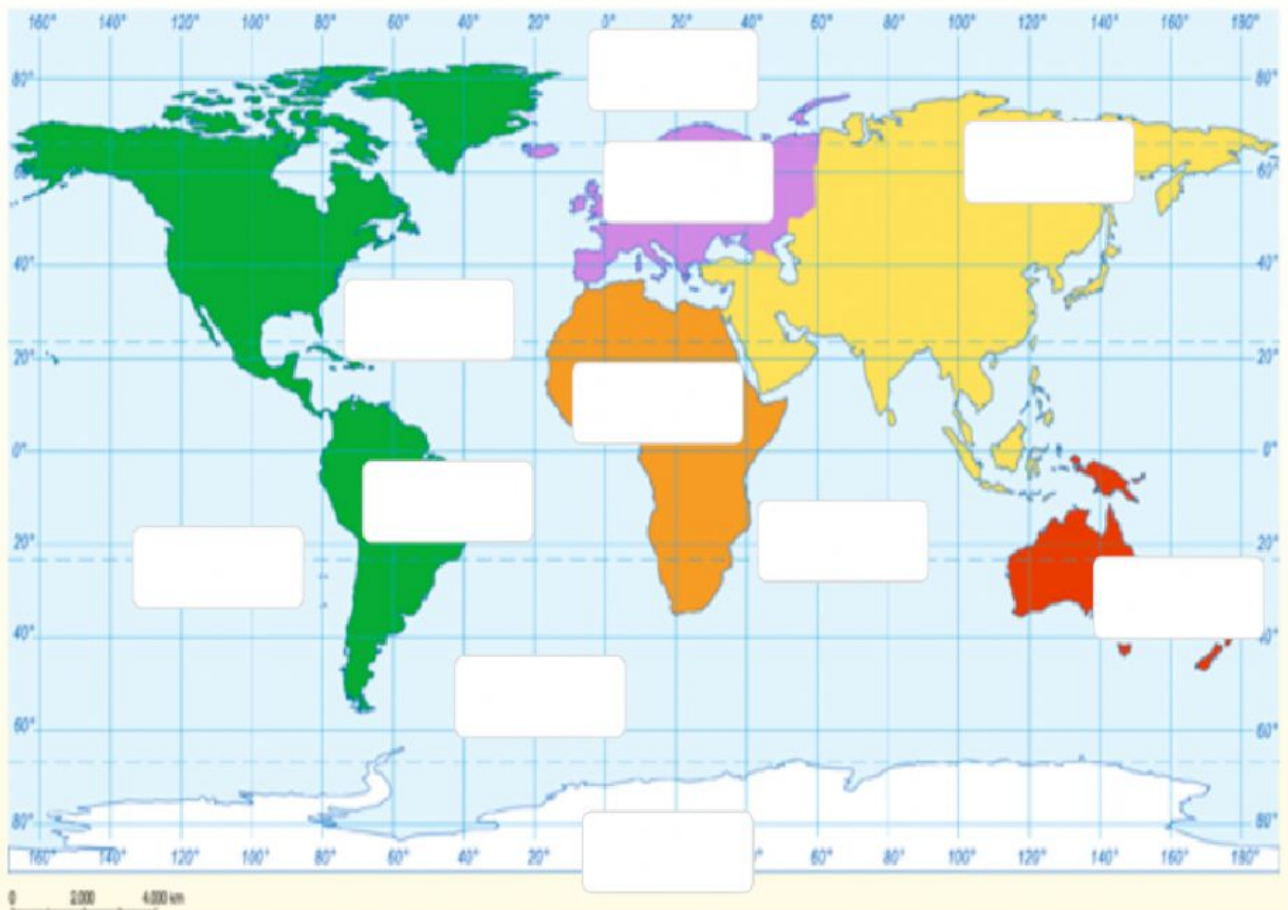
## Social Science Evaluation

Name: \_\_\_\_\_

**OBJECTIVE:** - Recognize and label the continents and oceans on Planet Earth.  
- Locate specific points on a grid.  
- Identify the advantages of using a globe or a planisphere to represent Earth.

1. Write the name of the continents and oceans on the map, use the words from the box. (11 points)

Africa – America – Antarctica – Arctic - Asia – Atlantic - Australia –  
Europe – Indian - Pacific – Southern





**2. Write the name of these two ways of representing the Earth. (4 points)**



**3. Think and write down one advantage for the globe and one for the planisphere. You can use Spanish or English. (6 points)**

Globe:















Planisphere:

**4. Answer the following question. You can use Spanish or English. (3 points)**

Why do you think maps have changed? Why is it important to have an updated version of Earth's surface?



5. Look at the floor plan of a classroom. Write the students' location according to the grid in the table. (10 points)


	A	B	C	D
1	 José	 Natalia	 Juan	 Nicolás
2	 Sofía	 Pablo	 Ignacio	 Violeta
3	 Emilio	 Gloria	 Rosario	 Elías
4	 Camilo	 Lucas	 Marco	 Daniela

<b>Daniela</b>	<b>4D</b>
<b>Nicolás</b>	
<b>Sofía</b>	
<b>Gloria</b>	
<b>Marco</b>	
<b>Camilo</b>	
<b>Natalia</b>	
<b>Lucas</b>	
<b>Emilio</b>	
<b>Pablo</b>	
<b>Violeta</b>	





6. Look at the plan and answer the questions using the grid and the wind rose. (12 points)



1.	Where is located the movie theater?	
2.	Where is located the pet store?	
3.	Where is located the school?	
4.	Where is Juan's house located?	
5.	Where is Ana's house located?	
6.	Where is Luis' house located?	