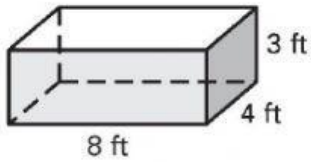


Geometry – Volume and Surface Area of Prisms

Complete the following

1)



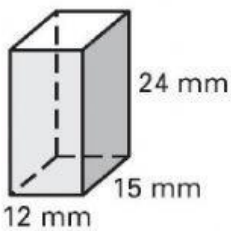
a) Find the volume

 ft^3

b) Find the surface area

 ft^2

2)



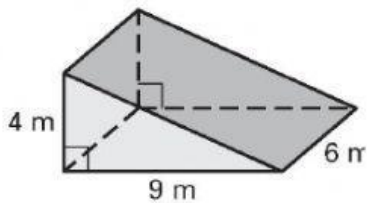
a) Find the volume

 mm^3

b) Find the surface area

 mm^2

3)



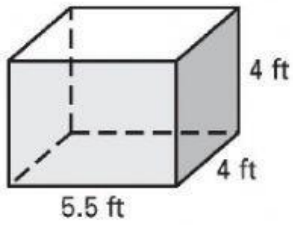
a) Find the volume

 m^3

b) Find the surface area

 m^2

4)



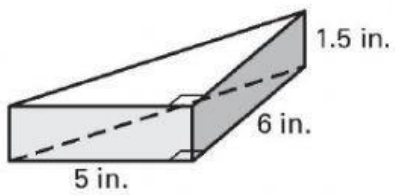
a) Find the volume

 ft³

b) Find the surface area

 ft²

5)



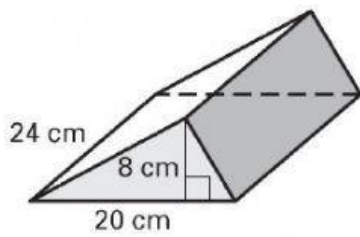
a) Find the volume

 in³

b) Find the surface area

 in²

6)



a) Find the volume

 cm³

b) Find the surface area

 cm²