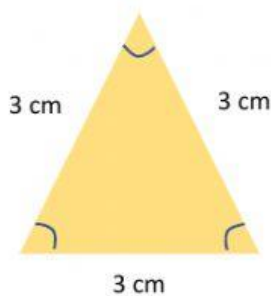


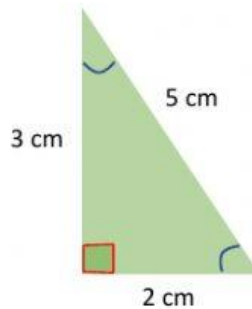
Name:

Date:

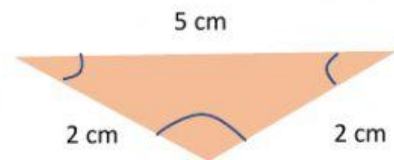
Look at the triangles and answer the questions below.



Triangle A



Triangle B



Triangle C

1. Which triangle have all 3 side lengths are the same?
2. Which triangle have 1 angle greater than the right angle?
3. Which triangle have all 3 side lengths are not the same?
4. Which triangle is a Right triangle?
5. Which triangle exactly 2 sides are the same?
6. Which triangle have all 3 angles less than the right angle?