





MORE OR LESS

Activity 1

1. Fill in the blanks.


 <div>3 is 1 more than <input type="text"/></div>	 <div>3 is 3 less than <input type="text"/></div>
 <div>20 is 5 more than <input type="text"/></div>	 <div>36 is 4 less than <input type="text"/></div>

2. Complete these.

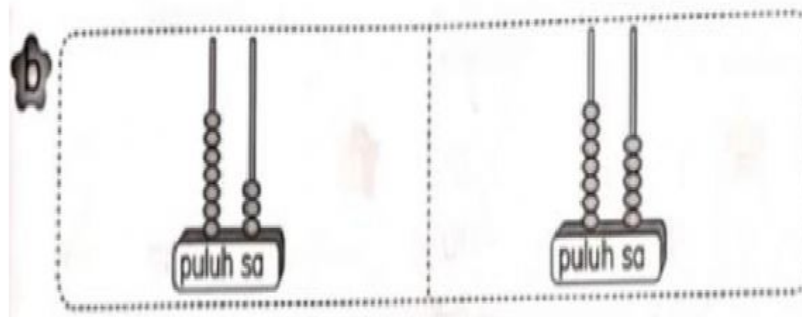
a)	7 is 3 more than	
b)	12 is 5 less than	
c)	52 is <input type="text"/> more than	48
d)	95 is <input type="text"/> less than	100

Activity 2

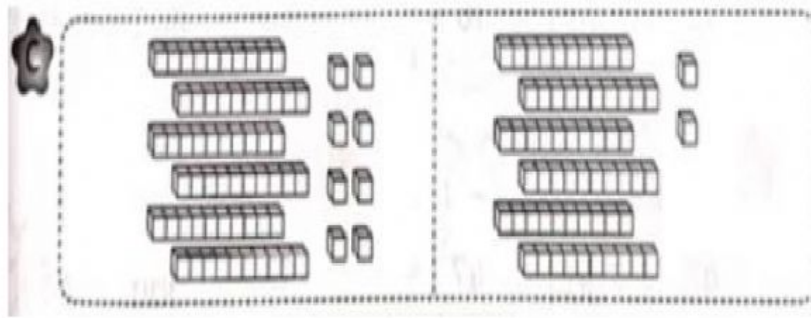
Write "more" or "less".



47 is 4		than 43.
43 is 4		than 47.
47 is		than 43.



















73 is 2		than 75.
75 is 2		than 73.
73 is		than 75.















68 is 6		than 62.
62 is 6		than 68.
68 is		than 62.

Activity 3

1. Tick (/) the numbers which refer to **more**.

<p>a  24 and  37</p> <p>c  60 and  50</p> <p>e  43 and  49</p> <p>g  93 and  100</p>	<p>b  53 and  56</p> <p>d  72 and  84</p> <p>f  91 and  19</p> <p>h  83 and  79</p>
--	---

2. Tick (/) the numbers which refer to **less**.

<p>a</p>  <p>15</p> <p><input type="checkbox"/></p>	<p>and</p>	 <p>18</p> <p><input type="checkbox"/></p>	<p>b</p>  <p>30</p> <p><input type="checkbox"/></p>	<p>and</p>	 <p>40</p> <p><input type="checkbox"/></p>
<p>c</p>  <p>48</p> <p><input type="checkbox"/></p>	<p>and</p>	 <p>47</p> <p><input type="checkbox"/></p>	<p>d</p>  <p>55</p> <p><input type="checkbox"/></p>	<p>and</p>	 <p>65</p> <p><input type="checkbox"/></p>
<p>e</p>  <p>97</p> <p><input type="checkbox"/></p>	<p>and</p>	 <p>94</p> <p><input type="checkbox"/></p>	<p>f</p>  <p>28</p> <p><input type="checkbox"/></p>	<p>and</p>	 <p>20</p> <p><input type="checkbox"/></p>