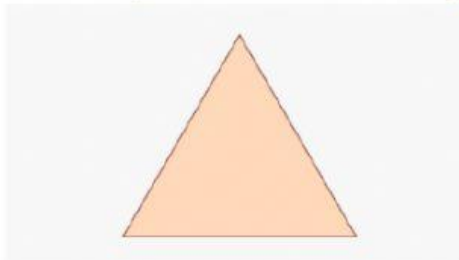


Learning Outcomes: Partitioning and Shapes

Question 1:

What shape has 3 sides and 3 angles ?



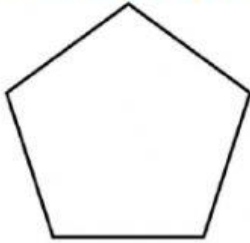
Question 2:

What type of triangle is this?



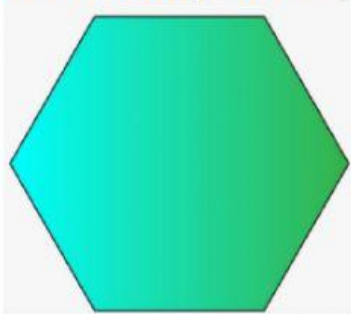
Question 3:

What shape is this ?



Question 4:

How many sides does a hexagon have ?



Question 5:

What shape is this ?



Question 6:

Name this 3D shape ?



Question 7:

Name this 3D shape ?



Question 8:

How many pieces is the circle partitioned (cut into) into ?



Question 9:

What shape is this ?



Question 10:

How many right angles does a rectangle have ?

