


Soustraire de l'argent

- ☐ Lisa paie pour ses autocollants.
Combien d'argent recevra-t-elle en retour?


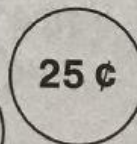
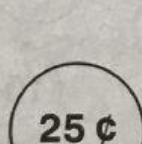
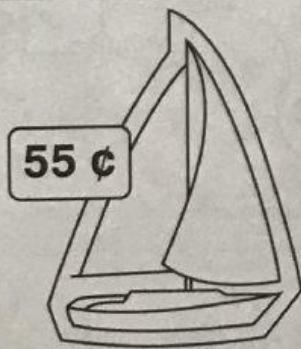


$$25 \text{ ¢} - 12 \text{ ¢} = 13 \text{ ¢}$$


Elle recevra 13 ¢ en retour.



$$\square \text{ ¢} - \square \text{ ¢} = \square \text{ ¢}$$



$$\square \text{ ¢} - \square \text{ ¢} = \square \text{ ¢}$$



$$\square \text{ ¢} - \square \text{ ¢} = \square \text{ ¢}$$