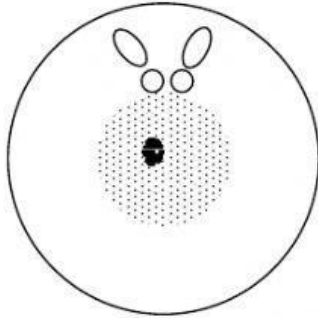


Name _____

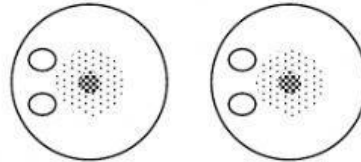
Stages of Mitosis

Number the following stages of mitosis in order and label each stage properly.

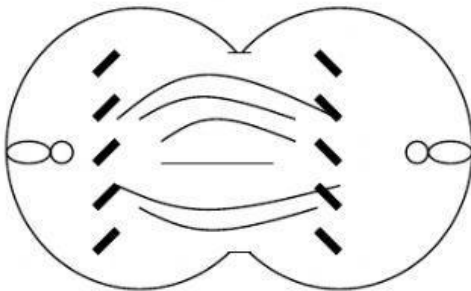
Labels: Metaphase, Telophase, Daughter Cells, Anaphase, Interphase, Prophase



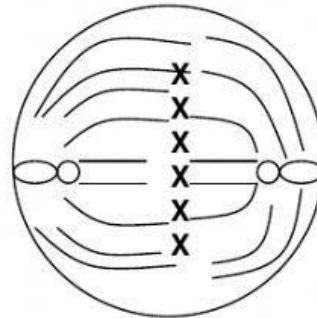
1. _____



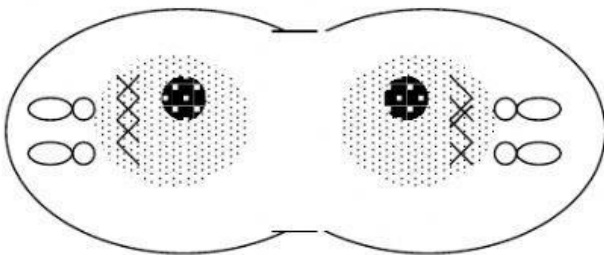
2. _____



3. _____



4. _____



5. _____



6. _____