
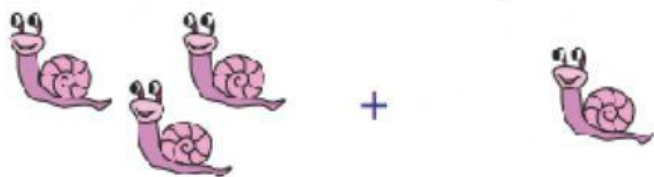



Look at each equation and identify if you need to add (+) or subtract (-).  
Cross out or count together to find the answer.



$$7 - 7 = \underline{\hspace{2cm}}$$



$$3 + 1 = \underline{\hspace{2cm}}$$



$$8 - 6 = \underline{\hspace{2cm}}$$



$$10 - 4 = \underline{\hspace{2cm}}$$



$$2 + 3 = \underline{\hspace{2cm}}$$