

Name: \_\_\_\_\_ Date: \_\_\_\_\_

## Numbers and problem solving

### Halves of numbers



Do you still remember what **half** is?

**Half** is one of two **equal (same)** parts of something. Let's learn 😊


**Upin** has 6 ice-cream cones.

He wants to share **half** of his ice-cream cones with his brother, **Ipin**.



**Upin** and his brother must get **equal** number of ice-cream cones.

Let's find **half** of 6




**Half** of 6 is 3

**Upin** and **Ipin** have the **equal** number of ice-cream cones.

Now, **Upin** has 3 and **Ipin** has 3 ice-cream cones too. They are happy 😊

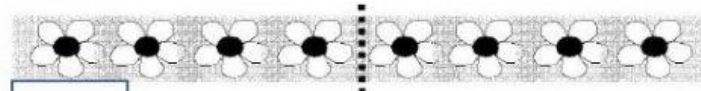
Let's practise to find halves of numbers. Type to write the missing numbers.

1) Find half of 4.



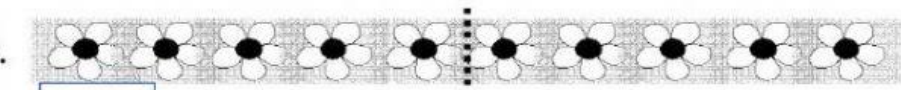
**Half** of 4 is

2) Find half of 8.



**Half** of 8 is

3) Find half of 10.



**Half** of 10 is

What do you notice when you find halves of 4, 8 and 10?

When we double the half of each number, it becomes the whole number.



**HALF** of 4 is 2 -----> and **DOUBLE** 2 is 4


Name: \_\_\_\_\_ Date: \_\_\_\_\_

Numbers and problem solving

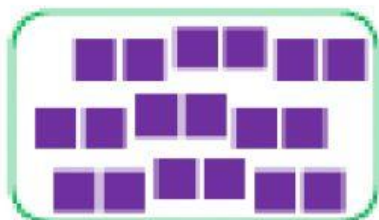
Halves of numbers



Find **half** of these numbers.  
Write the answers in the boxes.




Half of 6 =



Half of 18 =



Half of 10 =



Half of 14 =



Half of 2 =