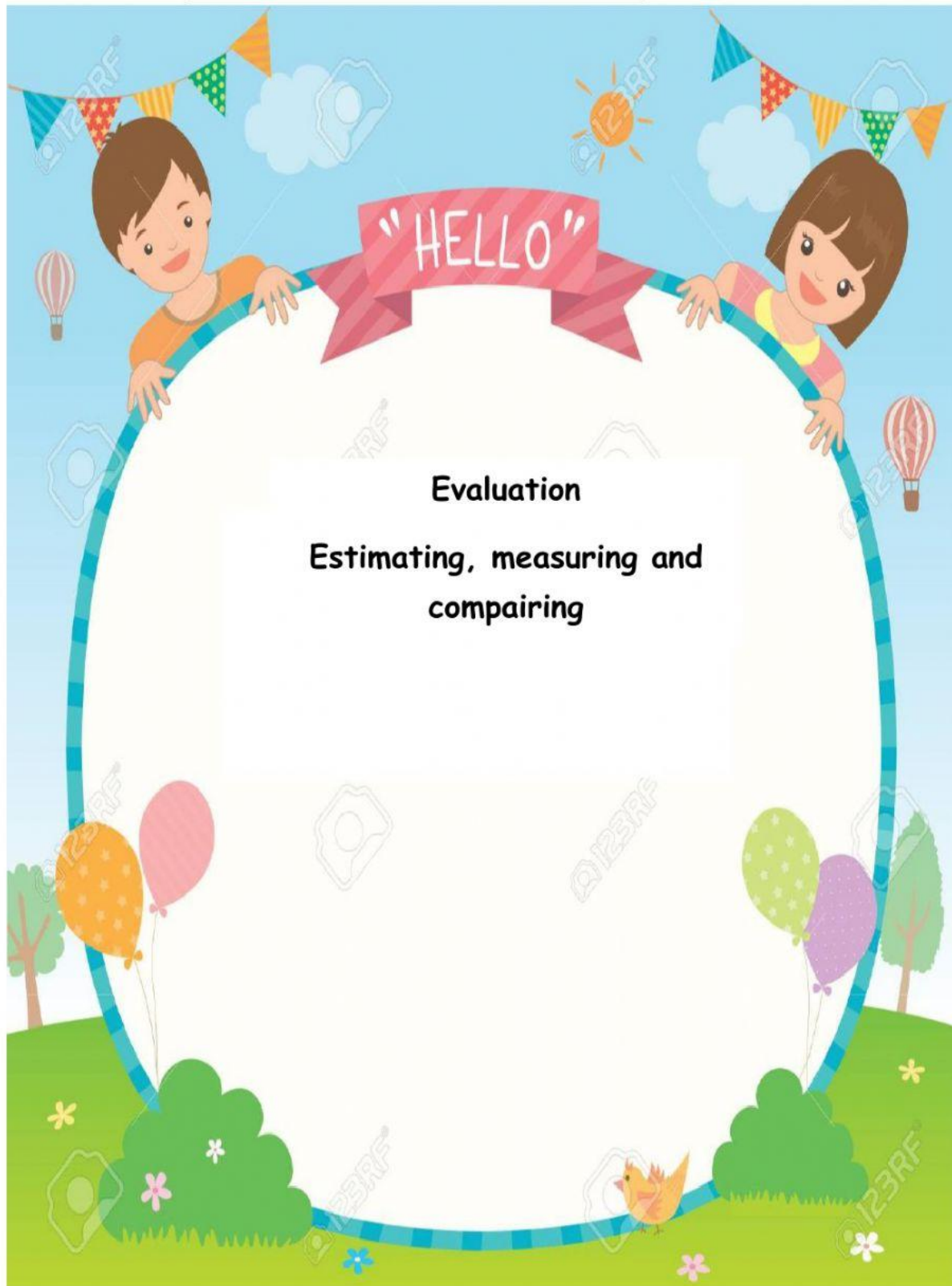


Name : _____

Date : _____



Evaluation
Estimating, measuring and
compairing

SD Tumbuh – Jogja Educational Spirit

Kelas : Lower A

Inquiry : Our Earth

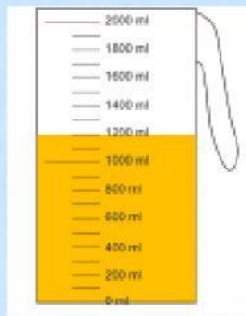
Mata Pelajaran : CIPP Math

Teacher's feedback:

Name : _____

Date : _____

1. Fill in the blanks!



The volume of liquid is ... ml

The capacity of the jug is ml

2. Look at the picture!



The of container varies according to how much content it can hold. The amount of liquid within the container is



the volume of water remains the even when it is poured into containers

SD Tumbuh – Jogja Educational Spirit

Kelas : Lower A

Inquiry : Our Earth

Mata Pelajaran : CIPP Math

Teacher's feedback:

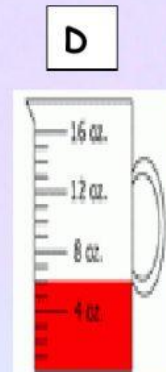
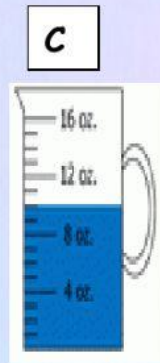
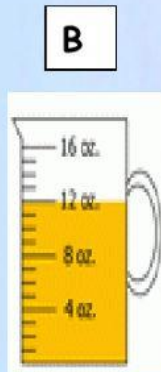
Name : _____

Date : _____

4. Read the jug and write your reading!



3



Answer this questions!

a. Wich jug has the most amount of water

b. Wich jug has the last amount of water

c. Jug has more water than jug C and D

d. The volume of water in jug C is less than the volume of water in jug

e. The volume of water in jug D is greater than the volume of water in jug

5. When the liquid in container takes up the same of space as is left over for more liquid

6. When there is no liquid in a container

SD Tumbuh – Jogja Educational Spirit

Kelas : Lower A

Inquiry : Our Earth

Mata Pelajaran : CIPP Math

Teacher's feedback:

Name : _____

Date : _____

7. These are some containers which can contain less than 1 litre of liquid.



A



B



C



that can hold more than 1 litre of liquid

8. Nicho fill similar scoop with all the water from bucket



=



= 1 litre



=



litre

SD Tumbuh – Jogja Educational Spirit

Kelas : Lower A

Inquiry : Our Earth

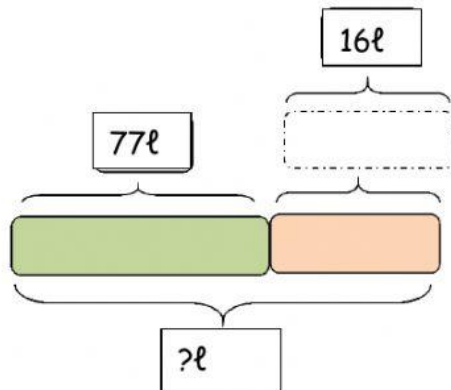
Mata Pelajaran : CIPP Math

Teacher's feedback:

Name : _____

Date : _____

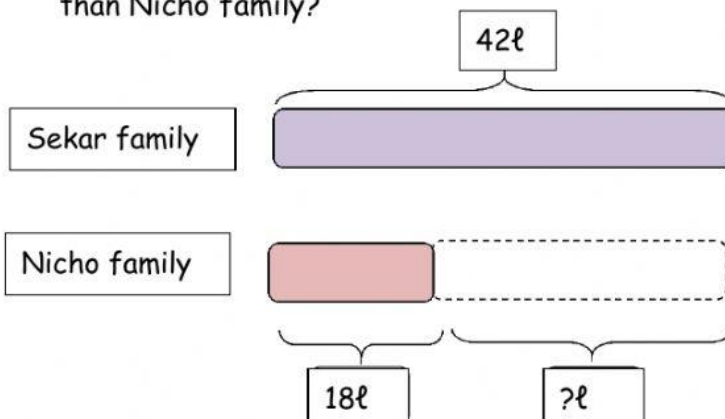
9. A water tank contain 77ℓ of water. Diwang fill up the tank with 16ℓ of water. How much water does the water tank contain now?



Answers :

The tank contain
 ℓ of
water now

10. On Sunday, Sekar family used 42ℓ of water. Nicho family used 18ℓ of water on the same day. How much more water did Sekar family used than Nicho family?



Answers :

Sekar family used ℓ more water than Nicho family

SD Tumbuh – Jogja Educational Spirit

Kelas : Lower A

Inquiry : Our Earth

Mata Pelajaran : CIPP Math

Teacher's feedback: