


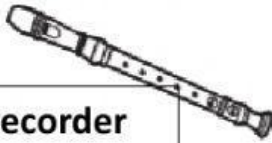


Name:

Date: Tuesday, May 18, 2021

Subject: Mathematics

Count. Then, complete the tally chart.

object	tally	total
 dog		
 car		
 rabbit		20
 recorder		

Use the tally chart to answer the following questions.

1. There are \_\_\_\_\_ dogs.
2. There are \_\_\_\_\_ cars.
3. There are \_\_\_\_\_ rabbits.
4. There are \_\_\_\_\_ recorders.

5. There are \_\_\_\_\_ more rabbits than cars.

6. There are \_\_\_\_\_ fewer recorders than dogs.

7. There are \_\_\_\_\_ fewer dogs than cars.