























































NO.	ITEMS	DO NOT WRITE IN THIS COLUMN												
16.	<p>Which of the following is not a quadrilateral?</p> <div style="display: flex; justify-content: space-around; align-items: center;"> <div style="text-align: center;">  A </div> <div style="text-align: center;">  B </div> <div style="text-align: center;">  C </div> <div style="text-align: center;">  D </div> </div>	1												
17.	<p>Which unit of measure is best suited to measure the quantity of water in a tank?</p> <div style="display: flex; justify-content: space-around; margin-top: 20px;"> <div style="text-align: center;">kilograms</div> <div style="text-align: center;">metres</div> </div> <div style="display: flex; justify-content: space-around; margin-top: 20px;"> <div style="text-align: center;">litres</div> <div style="text-align: center;">kilometres</div> </div>	1												
18.	<p>The pictograph shows the number of ice cream sold by a vendor for 5 days.</p> <table border="1" style="margin: 10px auto; border-collapse: collapse;"> <thead> <tr> <th style="padding: 5px;">Days</th> <th style="padding: 5px;">Number of ice cream</th> </tr> </thead> <tbody> <tr> <td style="padding: 5px;">Monday</td> <td style="padding: 5px;">     </td> </tr> <tr> <td style="padding: 5px;">Tuesday</td> <td style="padding: 5px;">   </td> </tr> <tr> <td style="padding: 5px;">Wednesday</td> <td style="padding: 5px;">    </td> </tr> <tr> <td style="padding: 5px;">Thursday</td> <td style="padding: 5px;">     </td> </tr> <tr> <td style="padding: 5px;">Friday</td> <td style="padding: 5px;">      </td> </tr> </tbody> </table> <div style="margin-top: 10px;"> <p>KEY  = 5 ice-creams</p> </div> <p>What is the modal number of ice cream sold over the 5 days?</p>	Days	Number of ice cream	Monday	   	Tuesday	 	Wednesday	  	Thursday	   	Friday	    	1
Days	Number of ice cream													
Monday	   													
Tuesday	 													
Wednesday	  													
Thursday	   													
Friday	