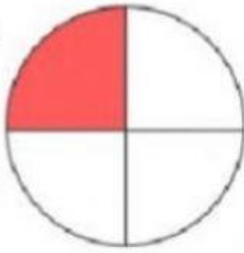


Fractions

What fraction does the colored area show?
Color in the bubble next to the correct answer.

1.



$\frac{1}{2}$



$\frac{3}{4}$

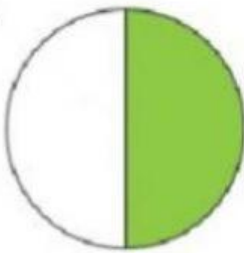


$\frac{1}{4}$



$\frac{1}{3}$

2.



$\frac{2}{3}$



$\frac{2}{4}$

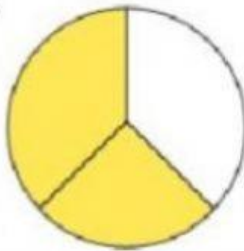


$\frac{1}{4}$



$\frac{1}{2}$

3.



$\frac{3}{4}$



$\frac{1}{2}$

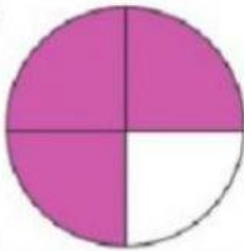


$\frac{2}{3}$



$\frac{1}{3}$

4.



$\frac{2}{4}$



$\frac{3}{4}$

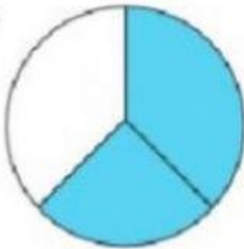


$\frac{1}{3}$



$\frac{1}{4}$

5.



$\frac{3}{4}$



$\frac{1}{3}$



$\frac{2}{4}$



$\frac{2}{3}$