





Name:

Date: Monday, May 17, 2020

Subject: Mathematics

Count. Then, complete the tally chart.



Type of vegetable	Tally marks	Number
 Cabbage		
 Tomato	1	6
 Bell pepper	1 1	
 Onion	1	

Answer the following questions.

1. There are \_\_\_\_\_ cabbages.
2. There are \_\_\_\_\_ tomatoes.
3. There are \_\_\_\_\_ bell peppers.
4. There are \_\_\_\_\_ onions.
5. There is \_\_\_\_\_ more bell pepper than onions.
6. There are \_\_\_\_\_ fewer cabbages than bell peppers.
7. There are \_\_\_\_\_ vegetables altogether.