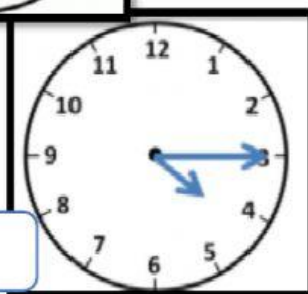
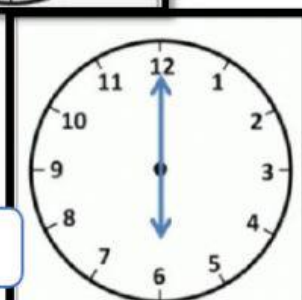
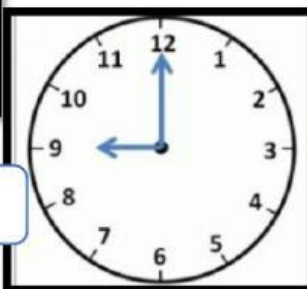
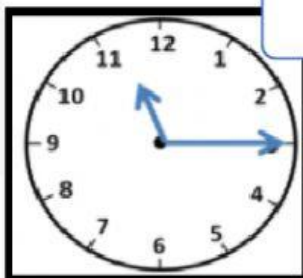


Telling time



Help Cinderella arrive to home before 12 o'clock by telling her the time!!.



Half past eight

Quarter past 11

Quarter past four

Nine o'clock

Six o'clock