


NOME: _____

DATA: _____

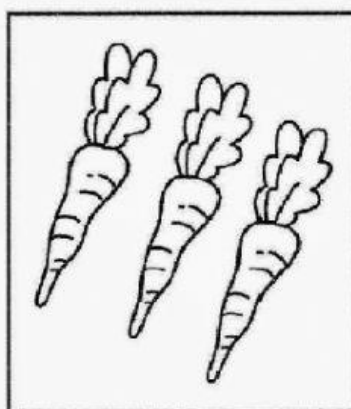
TURMA: _____

CONTE OS DESENHOS

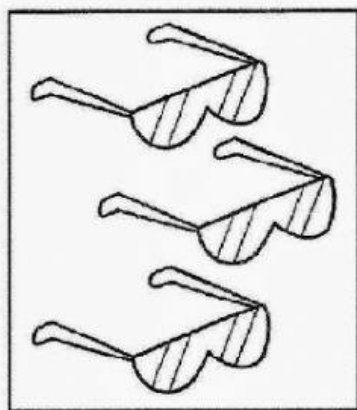
CONTE OS DESENHOS DE CADA QUADRO E ESCREVAS QUANTIDADES NOS CAMPOS DISPONÍVEIS. EM SEGUIDA CALCULE O RESULTADO DAS SOMAS:




+



=



+



=



Prof. Suzana e Prof. Valéria