

Friday 14th May, 2021

Term 3

Weekly Test 4- Mathematics

A. Solve the following problems. Remember to write your number statements.

1. There are **17** flowers in the vase.

Eleven flowers are sunflowers and the rest are roses.

How many flowers are roses?



2. Jada has **7 fewer** pencils than Mayah.

Mayah has **17** pencils.

How many pencils does Jada have?



3. Brielle baked **17** cupcakes.

She gave **14** cupcakes to mummy.

How many cupcakes were left?




4. There are **17** cookies on the tray.

Five cookies are chocolate chip and the rest are butter cookies.

How many are butter cookies?



B. Look at the picture and answer the following questions.



1. How many **animals** are there in all? _____ animals
2. How many **cats** are there in the picture? _____ cats
3. How many **mice** are there in the picture? _____ mice
4. How many **dogs** are there in the picture? _____ dogs
5. How many more mice than dogs? Write your number statement on the line.

.....

6. How many cats and dogs **altogether**? Write your number statement on the line.



.....

7. What else do you see in the picture and how many are there?


I see _____ in the picture.

C. Select the activities that take a longer time to complete.

Putting on jacket 	Eating breakfast 
--	---

Doing homework 	Brushing teeth 
--	---

D. Select the activities that take a shorter time to complete.

Paint a house 	Eat a sundae 
---	--

Feeding the dog 	Brushing teeth 
--	---

E. Look at the number of claps each activity may take to complete.
Order the activities from the shortest time to the longest time based on the number of claps.

Drinking a cup of water



30 claps

Putting socks on



10 claps

Putting on shirt



20 claps

Shortest time		Longest time