
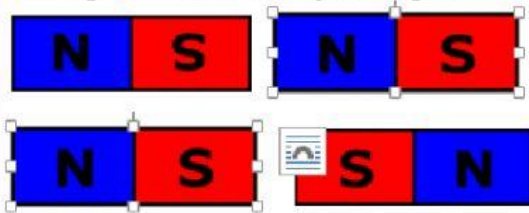


Magnets

1. Which picture shows magnets attract?



Which picture shows magnets repel?



2. Magnets have two ends. What are the two ends of a magnet call?

3. Some things where magnets can be found in.

Telephones

Toothbrush

television

computers

trains

4. What are the names of the magnets poles?

5. Which is not a shape of a magnet?

round

bar

cup

horse shoe

circle

Choose yes if the objects will attract to the magnets.



teddy



nail



needle



shell



paper clips



brick



steel cutlery



spanner



refrigerator



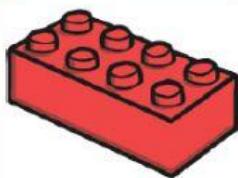
screwdriver



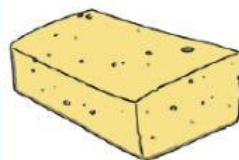
vegetables



wood



plastic blocks



sponge



knife



glass