

INDIRAPURAM PUBLIC SCHOOL, CROSSINGS REPubLIK

CLASS 1


NAME: \_\_\_\_\_

Date: \_\_\_\_\_

1. Add the given below pictures and write the answers in the blank.



2. Add using number bonds.



3. Fill in the missing numbers from the below given options.

1. When we add “zero” to the number the answer is the \_\_\_\_\_ number.
2. The (+) sign indicates \_\_\_\_\_.
3. When we add “1” to a number, the answer is the \_\_\_\_\_ number.
4. **Addition** means to \_\_\_\_\_ by combining two or more numbers.
5. **Addition** also means \_\_\_\_\_ counting.

addition





next

same

sum

forward

4. Match the following:

1.  +  9
2.  $8 + 1$  3
3.  +  6
4.  $6 + 0$  8
5.  $4 + 4$  4