

INDIRAPURAM PUBLIC SCHOOL, CROSSINGS REPUBLIK

CLASS 1

NAME: _____

Date: _____



1. Add the given below pictures and write the answers in the blank.



 +  = _____

 +  = _____

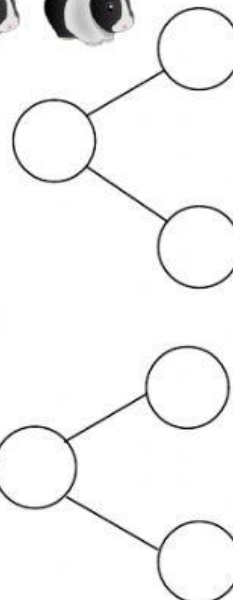
 +  = _____

2. Add using number bonds.

 +  = _____

 +  = _____

3 + 3 = _____



3. Fill in the missing numbers.

1. When we add “**zero**” to the number the answer is the _____ number.
2. The **(+)** sign indicates _____.
3. When we add “**1**” to a number, the answer is the _____ number.
4. **Addition** means to _____ by combining two or more numbers.
5. **Addition** also means _____ counting.

addition





next

same

sum

forward

4. Match the following:

1.  +  5
2. $8 + 1$ 6
3.  +  8
4. $6 + 0$ 3
5. $4 + 4$ 9