



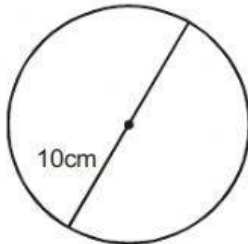
NOMBRE:

FECHA: Miércoles 12 de mayo de 2021

ÁREA DE UN CÍRCULO

Resuelve el área del círculo

Área del círculo



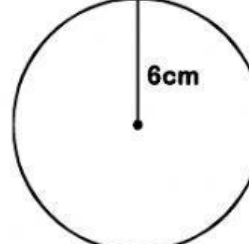
$A = \pi \times r^2$

$A = \underline{\hspace{1cm}} \times \underline{\hspace{1cm}}$

$A = \underline{\hspace{1cm}} \times \underline{\hspace{1cm}}$

$A = \underline{\hspace{1cm}}$

Área del círculo




$A = \pi \times r^2$

$A = \underline{\hspace{1cm}} \times \underline{\hspace{1cm}}$

$A = \underline{\hspace{1cm}} \times \underline{\hspace{1cm}}$

$A = \underline{\hspace{1cm}}$

Área del círculo



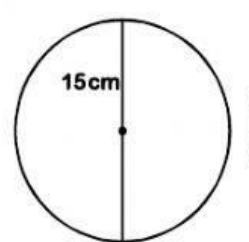
$A = \pi \times r^2$

$A = \underline{\hspace{1cm}} \times \underline{\hspace{1cm}}$

$A = \underline{\hspace{1cm}} \times \underline{\hspace{1cm}}$

$A = \underline{\hspace{1cm}}$

Área del círculo



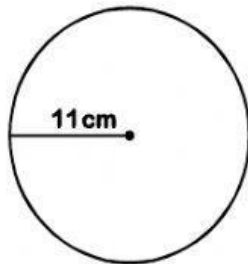
$A = \pi \times r^2$

$A = \underline{\hspace{1cm}} \times \underline{\hspace{1cm}}$

$A = \underline{\hspace{1cm}} \times \underline{\hspace{1cm}}$

$A = \underline{\hspace{1cm}}$

Área del círculo



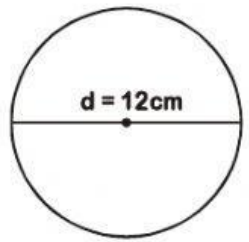
$A = \pi \times r^2$

$A = \underline{\hspace{1cm}} \times \underline{\hspace{1cm}}$

$A = \underline{\hspace{1cm}} \times \underline{\hspace{1cm}}$

$A = \underline{\hspace{1cm}}$

Área del círculo



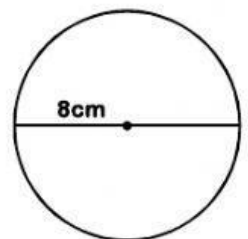
$A = \pi \times r^2$

$A = \underline{\hspace{1cm}} \times \underline{\hspace{1cm}}$

$A = \underline{\hspace{1cm}} \times \underline{\hspace{1cm}}$

$A = \underline{\hspace{1cm}}$

Área del círculo



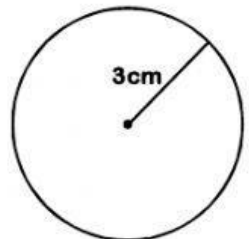
$A = \pi \times r^2$

$A = \underline{\hspace{1cm}} \times \underline{\hspace{1cm}}$

$A = \underline{\hspace{1cm}} \times \underline{\hspace{1cm}}$

$A = \underline{\hspace{1cm}}$

Área del círculo



$A = \pi \times r^2$

$A = \underline{\hspace{1cm}} \times \underline{\hspace{1cm}}$

$A = \underline{\hspace{1cm}} \times \underline{\hspace{1cm}}$

$A = \underline{\hspace{1cm}}$