


LANDSCAPES

1.- Write natural or man-made landscape



2.- Complete with the words in the box.

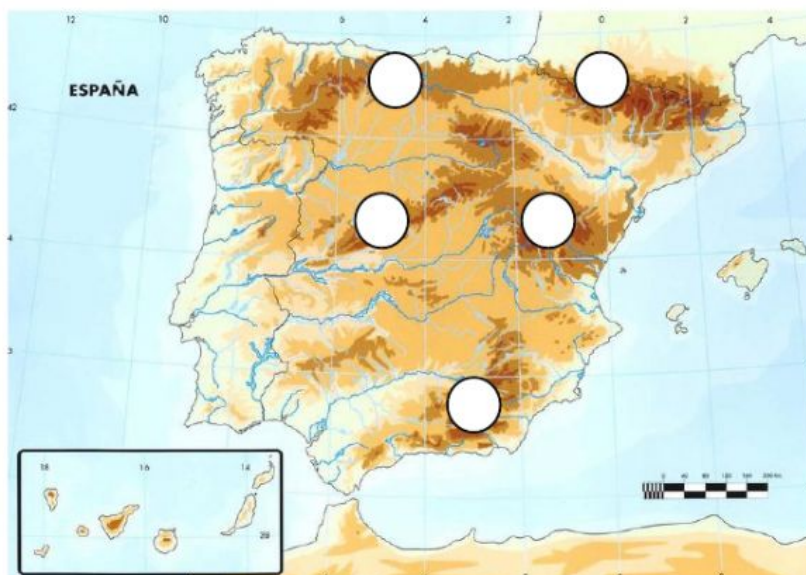
soil	animal	vegetation	landscape	mountain
------	--------	------------	-----------	----------

The natural features in a landscape are, rivers, valleys... Plants and forest are The climate and influence what type of vegetation there are. The vegetation influences the types of species which can live in a

3.- Elements of man-made landscapes

- | | | |
|----------------|---|---------|
| Tall buildings | • | |
| Villages | • | • rural |
| Crops | • | |
| Factories | • | |
| Fields | • | • urban |
| Cities | • | |

4.- Write the number in the correct place:



- | |
|---|
| 1.- Pyrenees
2.- Sistema bético
3.- Sistema central
4.- Cordillera cantábrica
5.- Sistema ibérico |
|---|

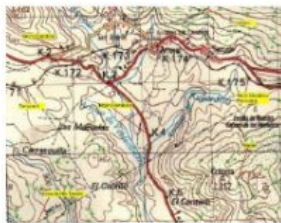
5.- Match



Topographic map



Physical map



Tourist map

6.- Write true or false

Symbols on maps give visual information about what is in the area.

On a topographic map, relief lines run through areas of land at different height.

A map is a drawing of the relief.

In a physical map, different height is shown in different lines.

7.- Read and complete:

Igneous rocks are formed

Sedimentary rocks are formed

Metamorphic rocks are formed

8.- Write in the correct column.

Bad for the landscape	Good for the landscape

WASTE ENERGY – RECYCLE – USE PUBLIC TRANSPORT – WASTE WATER – USE THE BIN – DROP RUBBISH ON THE STREET
--

9.- Write the name in English and Spanish.

