


Name _____

Math - Probability

Let's Play Marbles

Directions: Identify the probability for each question.



More Likely
Less Likely

1. What is the probability of pulling a black marble out of the bag?



More Likely
Less Likely


2. What is the probability of pulling a white marble out of the bag?



More Likely
Less Likely


3. What is the probability of pulling a black and white marble out of the bag?



How likely are you to grab a  ?

More likely **Less likely**



How likely are you to grab a  ?

More likely **Less likely**