

Telling Time – Unit Test

1. On Saturday Naomi gets up at 8 o'clock. Select the clock that shows 8 o'clock.



2. On Saturday Louis goes to soccer practice at 8:30. Select the clock that shows half past 8.



3. Mason takes his dog for a walk at 1:30. Select the clock that shows half past 1.



4. Julia eats lunch at 12 o'clock. Select the clock that shows noon.



5. Lucas has P.E. at 1:30. Select the clock that shows half past one



6. This clock shows:



9 o'clock

12 o'clock

12:45

7.





This clock shows:

5 past 12

1 o'clock

noon

8. Sophia and Alana can go on a ride at 4:00. Which clock shows 4:00?



9. What time is shown on the clock?

☐ 1:00

☐ 12:30

☐ 1:30



10.



Marybeth draws the hands on the clock to show 6:30. What number will the minute hand point to?



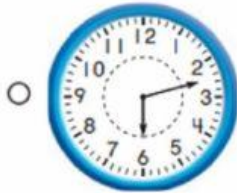
4

6

12

11.

Which clock shows 2:30?



12.

What is the time? [TEKS 1.7.E](#)

☐ 7:00



☐ half past 7:00

☐ 8:00



13.

Mary goes to art class at 12:15. Which clock shows this time?



14.

Representations Which digital clock shows the same time as the clock to the right?




☐



☐



☐



15.

Ricardo is having dinner at 6:15. Which clock shows this time?

☐



☐



☐




16.

Apply This clock shows the time that Miss Grant went to work at the library. Which digital clock shows the same time as the clock to the right?



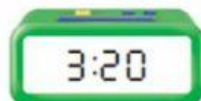
☐



☐



☐



17.

This clock shows the time that Evan watches TV. What time is shown on the clock?

☐

11:28

☐

4:55

☐

12:30



18. Reading group begins at 10:15 a.m. and lasts for 25 minutes. Math class begins 8 minutes after reading group ends. What time does Math class begin?
- a. 10:40 a.m. c. 10:48 a.m.
b. 10:58 a.m. d. 10:45 a.m.
19. Teresa is in her yard from 2:10 p.m. to 3:05 p.m.. She plants flowers for 15 minutes and water them for 22 minutes. Then she trims some bushes. How much time does she spend trimming bushes?
- a. 40 minutes c. 18 minutes
b. 33 minutes d. 28 minutes
20. Danielle gets on the subway at 1:40 p.m.. She rides for 17 minutes then she walks for 18 minutes to her apartment. At what time does Danielle arrive at her apartment?
- a. 2:38 p.m. c. 3:06 p.m.
b. 2:15 p.m. d. 1:57 p.m.