



ESCOLA META – EDUCAR É A NOSSA PAIXÃO

PROFESSORA: CARLENE HAGE

ALUNO (A): _____

DATA: ____/____/____

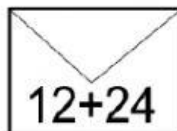
ATIVIDADE DE MATEMÁTICA

FAÇA O CÁLCULO MENTAL E COMPLETE AS ADIÇÕES COM OS RESULTADOS DA NUVEM.



- | | | |
|--------------------|---------------------|--------------------|
| A) $5 + 8 =$ _____ | G) $10 + 7 =$ _____ | M) $6 + 6 =$ _____ |
| B) $7 + 9 =$ _____ | H) $11 + 7 =$ _____ | N) $7 + 7 =$ _____ |
| C) $6 + 7 =$ _____ | I) $5 + 7 =$ _____ | O) $8 + 8 =$ _____ |
| D) $8 + 9 =$ _____ | J) $6 + 8 =$ _____ | P) $9 + 9 =$ _____ |
| E) $8 + 7 =$ _____ | K) $6 + 9 =$ _____ | |
| F) $9 + 7 =$ _____ | L) $6 + 10 =$ _____ | |

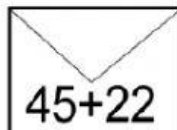
FAÇA O CÁLCULO MENTAL DAS CORRESPONDÊNCIAS ABAIXO E SELECIONE A RESPOSTA CORRETA.

 $12 + 24$

•

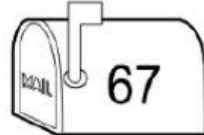
•

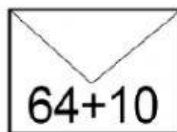


 $45 + 22$

•

•

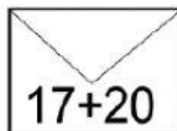


 $64 + 10$

•

•



 $17 + 20$

•

•



3) CALCULE O RESULTADO DE CADA OPERAÇÃO:

A)
$$\begin{array}{r} 25 \\ + 4 \\ \hline \end{array}$$

B)
$$\begin{array}{r} 29 \\ + 10 \\ \hline \end{array}$$

C)
$$\begin{array}{r} 15 \\ + 3 \\ \hline \end{array}$$

D)
$$\begin{array}{r} 30 \\ + 6 \\ \hline \end{array}$$