

## AREA OF RECTANGLES SHEET 3



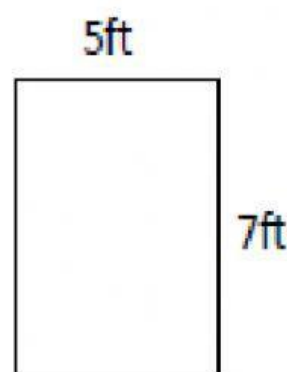
Work out the area of the following rectangles. They are not to scale.

1)



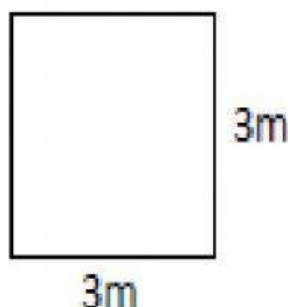
Area = \_\_\_\_\_ square cm

2)




Area = \_\_\_\_\_ square ft

3)




Area = \_\_\_\_\_ square m

4)




Area = \_\_\_\_\_ square in

5)



Area = \_\_\_\_\_ square m

6)



Area = \_\_\_\_\_ square cm