




























PICTOGRAPH

The pictograph below shows the number of marks obtained by students in an Art Exam out of a total of 100 marks.

Key:  represents 10 marks

Name	Marks Obtained	Total
Jesse	    	50
Martin	      	
Aaliyah	 	
Destiny	   	
John	        	

1. Complete the Total column for the pictograph.
2. How much marks did Martin make in Art? _____
3. Which student earned the most marks? _____
4. How much more marks did Martin make than Jesse. _____
5. Who made the least marks? _____
6. How much more marks does Aaliyah need to get 70 marks? _____