

END OF TEST SEMESTER II



Full name :

Grade/ class : 1

Day/month :

Time allowance : 15 minutes

Subject : English Math

Test No : 01

School year : 2020-2021

Page No : 3 pages

Circle for the following questions

1. What is the answer to a division?

- A. Sum B. Difference C. Product D. Quotient

2. What is the correct symbol for the story?

Gary has 35 boxes of apples.


He has 5 apples in each box.

How many apples are there altogether?

$$35 \bigcirc 5 = ?$$

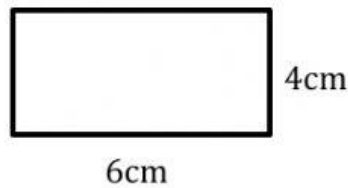
- A. \times B. $-$ C. \div D. $+$

3. What is the perimeter of the square?



- A. 10cm B. 14cm C. 20cm D. 25cm

4. What is the area of the rectangle?



A. 10cm^2

B. 14cm^2

C. 20cm^2

D. 24cm^2

5. Which fraction is $\frac{1}{2}$?

A. One half

B. Two thirds

C. Three thirds

D. One quarter

Circle True or False for the following questions

6.

To find the perimeter of a shape we add all the lengths.

True False

The area of a shape is how long it is.

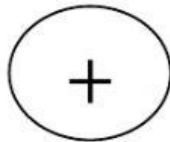
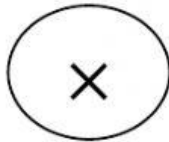
True False

This fraction is two thirds. $\frac{2}{3}$

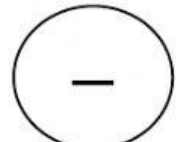
True False

Draw a line for the following questions


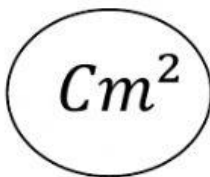
7. Times as many



8. Share equally



9. Squared Centimetre



10. Area



Solve the problems

9. Gary has 28 toys.

He shares them equally into 7 groups.

How many toys does Gary have in each group?

Equation: _____

Word answer: _____.

- 10.** There are 13 boxes. There are 6 toy cars in each box.
How many toy cars are there altogether?

Equation: _____

Word answer: _____.

- 11.** Write and solve a division story with the numbers 96 and 4.

Equation: _____

Word answer: _____.

