




**Choose the correct answer**

**No.1**

**Look at the picture below**



**What are bricks made of?**

**A. Sand**

**B. Stone**

**C. Clay**

**D. Marble**

## No.2

**Which of the following is the statue most likely made of?**



- A. Slate
- B. Marble
- C. Sand
- D. Gravels

**No.3**

**Look at the picture below**




**The building above is  
made entirely out of marble**


**TRUE**

**FALSE**


## **No.4** Look at the pictures below



▲ Sand



▲ Clay



▲ Soil

**All three substances are  
formed from rocks.**

**TRUE**

**FALSE**

## **No.5**

\_\_\_\_\_ is formed when rocks under the earth through very high heat and pressure.

- A. Igneous**
- B. Metamorphic**
- C. Sedimentary**



## **No.6**

\_\_\_\_\_ is formed when lava from volcanoes cools and hardens.

- A. Igneous**
- B. Metamorphic**
- C. Sedimentary**

## **No.7**

\_\_\_\_\_ is formed when rock pieces are buried underwater, and then squeezed and glued together with minerals.

- A. Igneous
- B. Metamorphic
- C. Sedimentary



