


Name _____

Probability


Directions: Circle the correct answer.



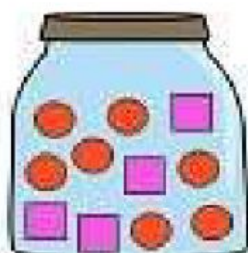
How likely are you to grab a ?


More likely Less likely



How likely are you to grab a ?


More likely Less likely



How likely are you to grab a ?

More likely Less likely



How likely are you to grab a ?

More likely Less likely