

Name:

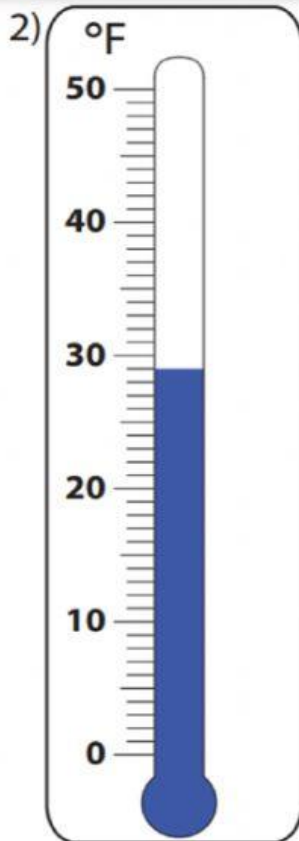
Date: Tuesday, May 11, 2021

Subject: Mathematics

1. Write hot or cold for the picture below.



2. Read the thermometer and write the temperature.

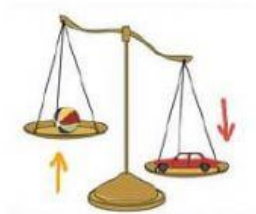


\_\_\_\_\_ °F

3. I do not like when my food is hot or cold. I like when it is \_\_\_\_\_.

- a) warm
- b) cold
- c) brown

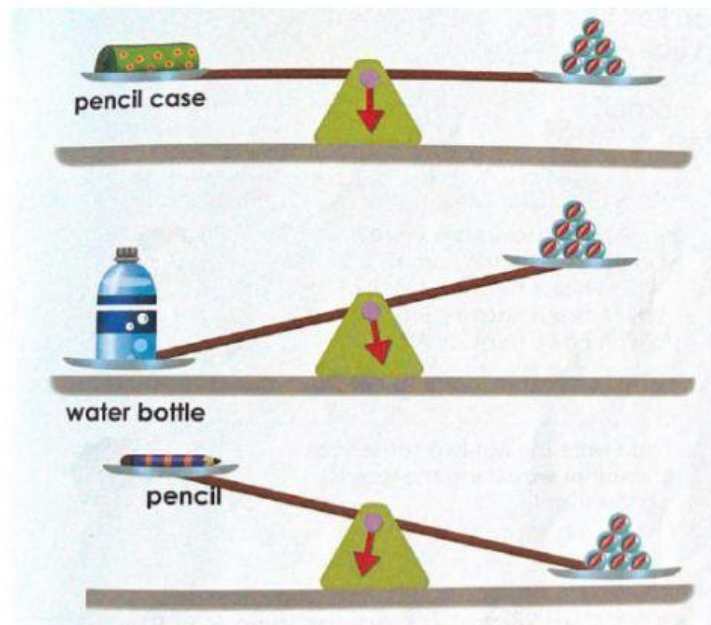
4.



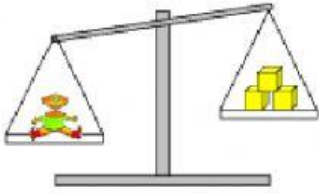
The ball is \_\_\_\_\_ the car.

- heavier than
- lighter than
- as heavy as

5. Which object is the heaviest?



6.




The toy is \_\_\_\_\_ 3 units.

heavier than

lighter than

as heavy as

7. Which picture shows  $3 \times 5$ ?



8.

$$2 \times 8 =$$

9.

$$3 \times 7 =$$

10.

$$4 \times 11 =$$