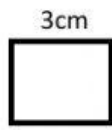
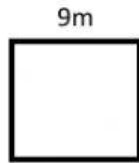


Find the area and perimeter of the following shapes:



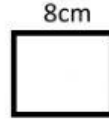
Area: _____

Perimeter: _____




Area: _____

Perimeter: _____



Area: _____

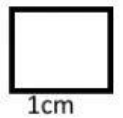
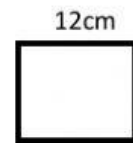
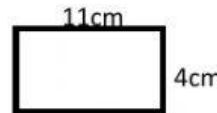
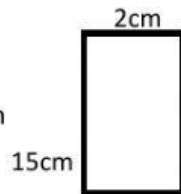
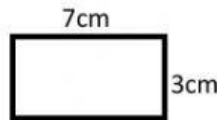
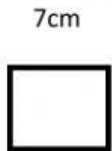
Perimeter: _____



Area: _____

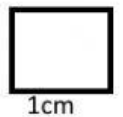
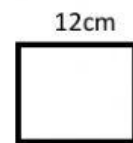
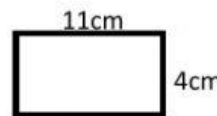
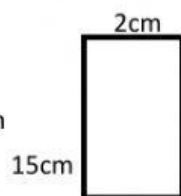
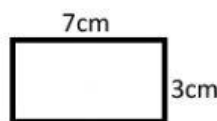
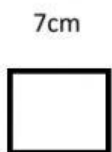
Perimeter: _____

Calculate the area of each shape.



Drag and drop the shapes to arrange in ascending order.

Calculate the perimeter of each shape.



Drag and drop the shapes to arrange in descending order.
