


# ATIVIDADE INTERATIVA DE GEOGRAFIA

NOME:

DATA:


**PROFESSORA ADRIANA LOPES - 1º ANO - TURMA 102**

1 - OBSERVE AS IMAGENS E AS SOMBRAS PROJETADAS. IDENTIFIQUE O SOL CORRETO EM RELAÇÃO A POSIÇÃO DA SOMBRA EM CADA IMAGENS.




Three beach scenes showing a red and white striped umbrella on a sandy beach. In each scene, a shadow is cast on the sand. The sun is shown in three different positions in the sky: high and to the left, high and to the right, and low and to the right. A large sun icon is on the right side of the page.

em:



Three dog shadows are shown, each with a sun icon above it. The sun icons are labeled 1º, 2º, and 3º. The shadows are cast in different directions, corresponding to the sun positions in the beach scenes above.



Three children are standing on a grassy field. Each child has a shadow cast on the grass. The sun is shown in three different positions in the sky: high and to the left, high and to the right, and low and to the right. The children are labeled 1, 2, and 3.



Three children are standing on a grassy field. Each child has a shadow cast on the grass. The sun is shown in three different positions in the sky: high and to the left, high and to the right, and low and to the right. The children are labeled DE MANHÃ, AO MEIO DIA, and À TARDE.