

ESCOLA CLASSE 08 DE BRAZLÂNDIA

PROFESSORA: _____

ALUNO(A): _____

DATA: _____ / _____ / _____

ATIVIDADE



- 1) MARIA SERVIU NO ALMOÇO DO SEU COELHINHO. ELE COMEU 2 CENOURAS.


SOBROU ALGUMA CENOURA?

SIM


NÃO

--	--


QUANTAS ? _____

DESENHO	OPERAÇÃO	RESPOSTA
	_____ - _____ = _____	SOBROU _____ CENOURA.


- 2) NO ZOOLOGICO HAVIA  ,MAS 2 DELES FORAM PARA O CIRCO. QUANTOS ELEFANTES RESTARAM NO ZOOLOGICO?

DESENHO	OPERAÇÃO	RESPOSTA
	$\text{---} - \text{---} = \text{---}$	AINDA RESTARAM ___ ELEFANTES.

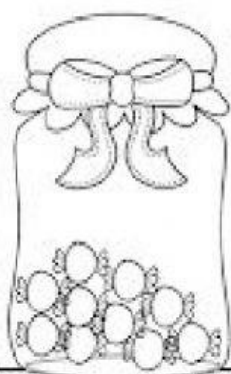
- 3) EM UM AQUÁRIO HAVIA  . PEDRO DEU 3 PEIXINHOS À SUA PRIMA.COM QUANTOS PEIXINHOS PEDRO FICOU?

DESENHO	OPERAÇÃO	RESPOSTA
	$\text{---} - \text{---} = \text{---}$	PEDRO FICOU COM___ PEIXES.

4) QUANTAS BALAS RESTARAM EM CADA POTE?



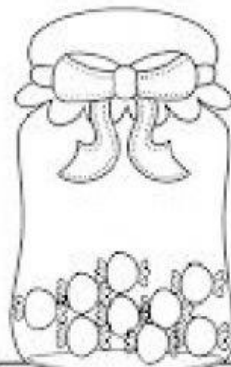
$$2 - 1 =$$



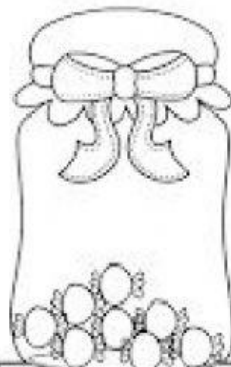
$$10 - 3 =$$




$$7 - 5 =$$



$$9 - 2 =$$



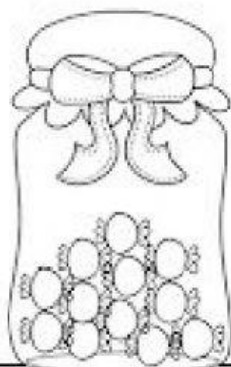
$$8 - 6 =$$




$$3 - 3 =$$



$$5 - 1 =$$



$$12 - 8 =$$



$$8 - 5 =$$

