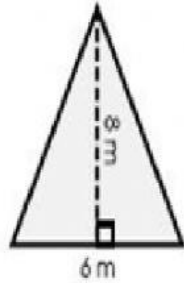


Area of triangle

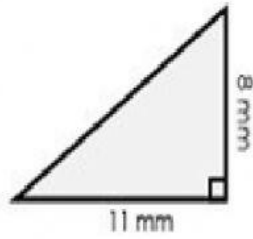
Find the area of the following triangle

1.

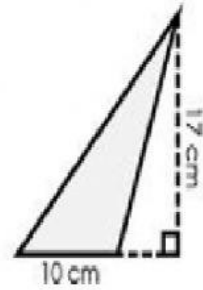
a.



b.

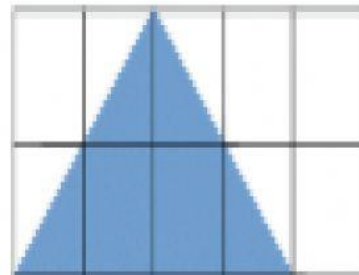
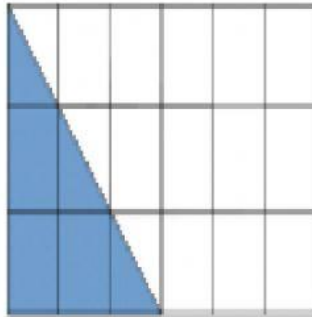


c.

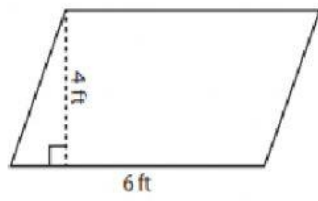


$$A = \frac{b \times h}{2}$$
$$\frac{6 \times 8}{2} = \frac{48}{2} = 24 \text{ m}^2$$

2. What is the area of the following triangles ?

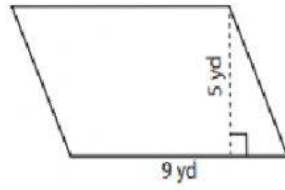


1)



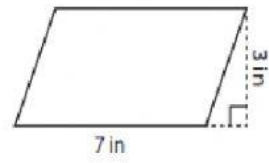
Area =

2)



Area =

3)



Area =