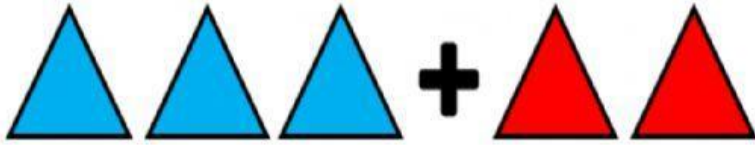
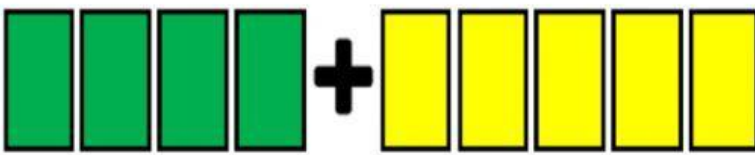


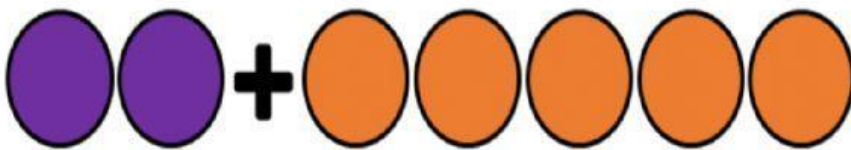
Contar las figuras por  
colores, sumar y colocar  
la respuesta correcta




$$\boxed{\downarrow} + \boxed{\downarrow} = \boxed{\phantom{00}}$$



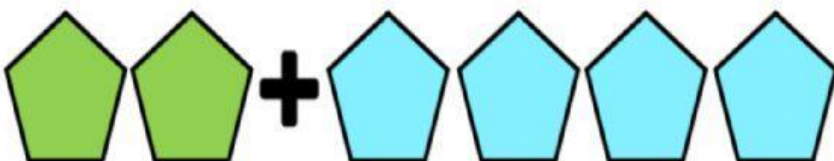
$$\boxed{\downarrow} + \boxed{\downarrow} = \boxed{\phantom{00}}$$



$$\boxed{\downarrow} + \boxed{\downarrow} = \boxed{\phantom{00}}$$



$$\boxed{\downarrow} + \boxed{\downarrow} = \boxed{\phantom{00}}$$



$$\boxed{\downarrow} + \boxed{\downarrow} = \boxed{\phantom{00}}$$